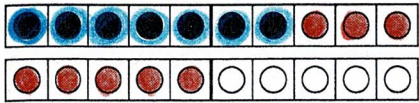


Name:

Datum:

$$7 + 8 =$$

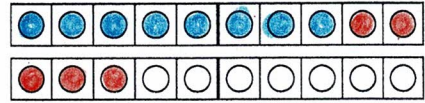


$$7 + 8 = 15$$

10

$$7 + 3 + 5 = 15$$

$$8 + 5 = 13$$

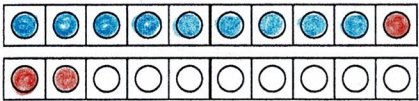


$$8 + 5 = 13$$

10

$$8 + 2 + 3 = 13$$

$$9 + 3 = 12$$

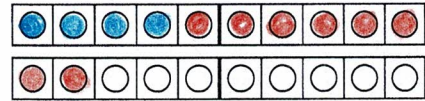


$$9 + 3 = 12$$

10

$$9 + 1 + 2 = 12$$

$$4 + 8 = 12$$

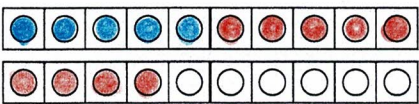


$$4 + 8 = 12$$

10

$$4 + 6 + 2 = 12$$

$$5 + 9 = 14$$

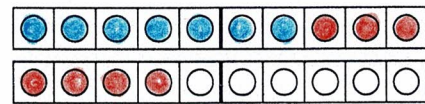


$$5 + 9 = 14$$

10

$$5 + 5 + 4 = 14$$

$$7 + 7 = 14$$



$$7 + 7 = 14$$

10

$$7 + 3 + 4 = 14$$