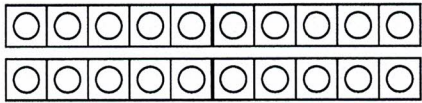


Name: _____

Datum: _____


$6 + 7 =$



$\square + \square = \square$

$\square + \square + \square = \square$

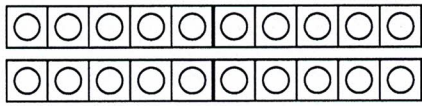
$7 + 4 =$



$\square + \square = \square$

$\square + \square + \square = \square$


$9 + 3 =$



$\square + \square = \square$

$\square + \square + \square = \square$

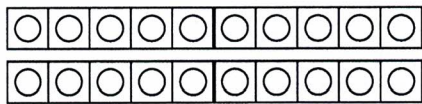
$3 + 9 =$



$\square + \square = \square$

$\square + \square + \square = \square$

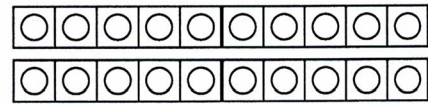
$5 + 8 =$



$\square + \square = \square$

$\square + \square + \square = \square$

$9 + 6 =$



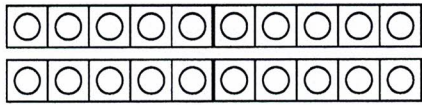
$\square + \square = \square$

$\square + \square + \square = \square$

Name:

Datum:


$$6 + 9 =$$



$$\square + \square = \square$$

$$\square + \square + \square = \square$$

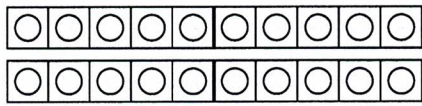
$$4 + 8 =$$



$$\square + \square = \square$$

$$\square + \square + \square = \square$$

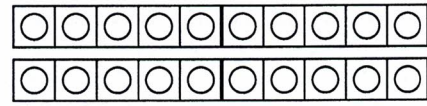
$$5 + 7 =$$



$$\square + \square = \square$$

$$\square + \square + \square = \square$$

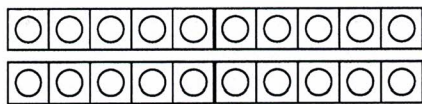
$$3 + 8 =$$



$$\square + \square = \square$$

$$\square + \square + \square = \square$$

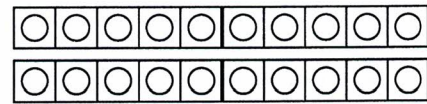
$$2 + 9 =$$



$$2 + \square = \square$$

$$\square + \square + \square = \square$$

$$7 + 9 =$$



$$\square + \square = \square$$

$$\square + \square + \square = \square$$